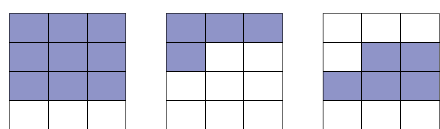


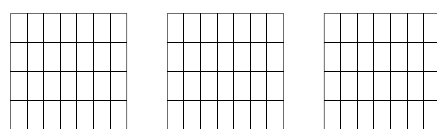
Subtracting Fractions

Name:


Surname:




$$\frac{3}{4} - \frac{1}{3} = \frac{5}{12}$$



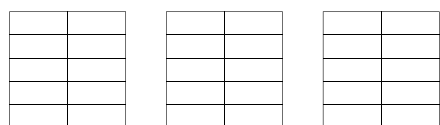
$$\frac{5}{7} - \frac{1}{4} = \frac{\quad}{\quad}$$



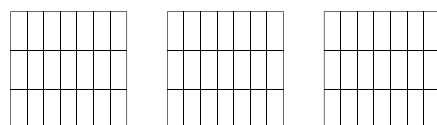
$$\frac{2}{3} - \frac{2}{5} = \frac{\quad}{\quad}$$



$$\frac{8}{9} - \frac{1}{2} = \frac{\quad}{\quad}$$



$$\frac{1}{2} - \frac{2}{5} = \frac{\quad}{\quad}$$



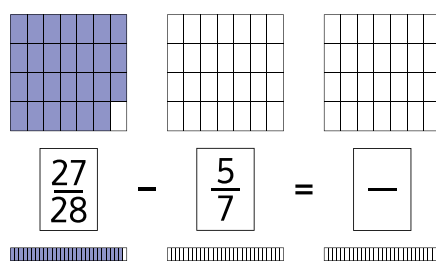
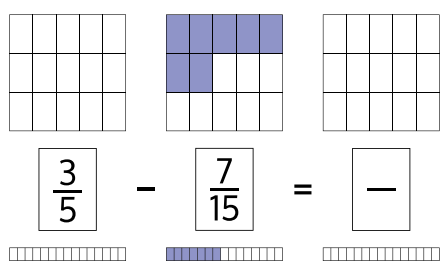
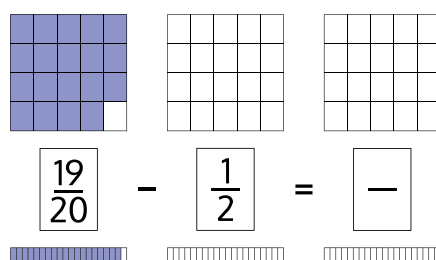
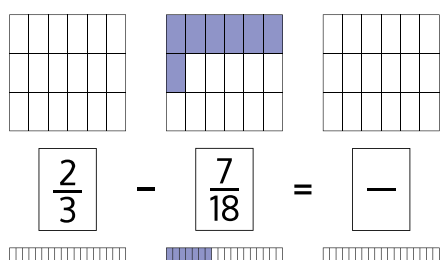
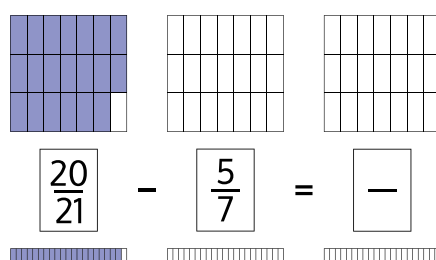
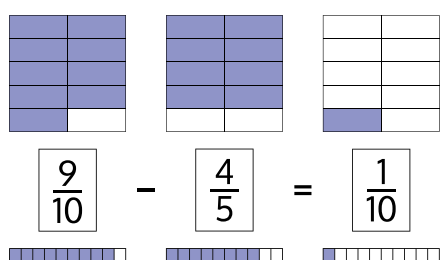
$$\frac{6}{7} - \frac{2}{3} = \frac{\quad}{\quad}$$



Subtracting Fractions

Name:

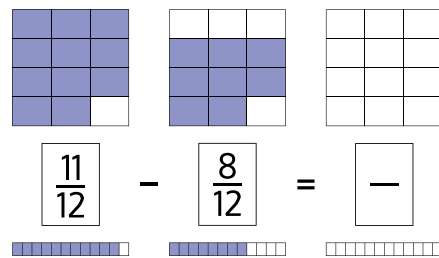
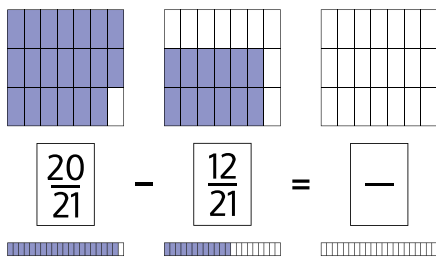
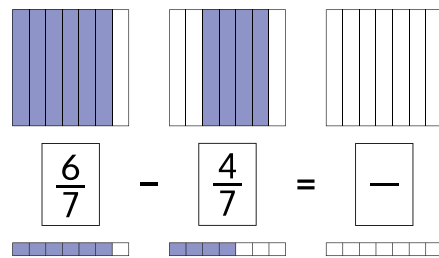
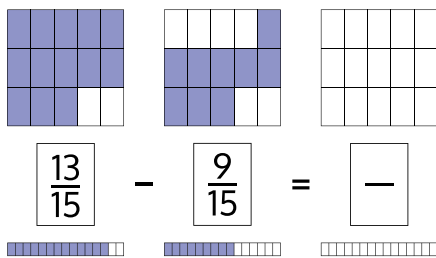
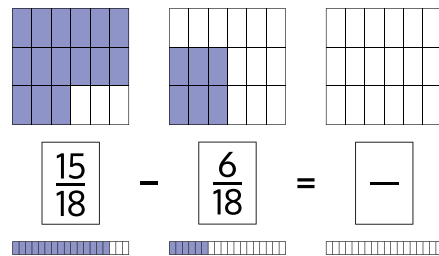
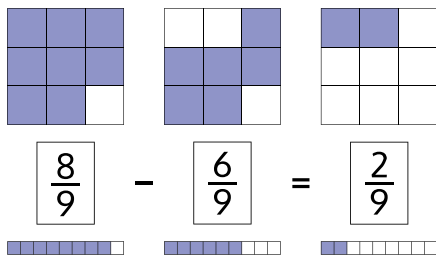
Surname:



Subtracting Fractions

Name:

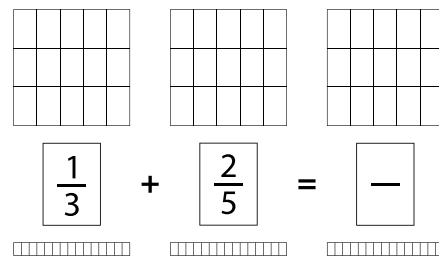
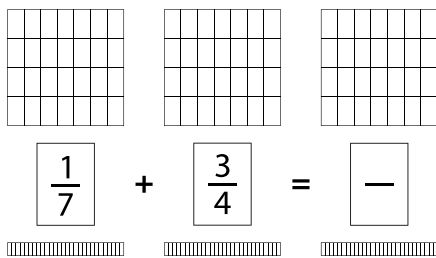
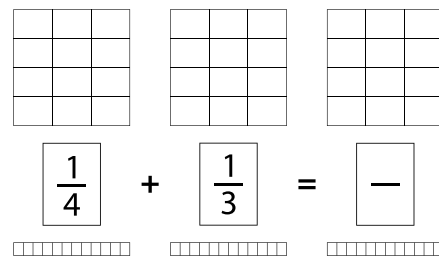
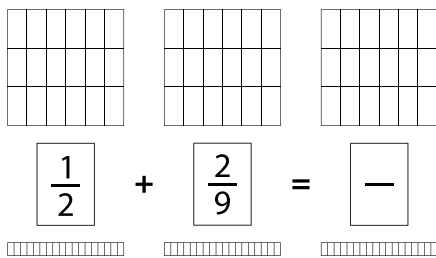
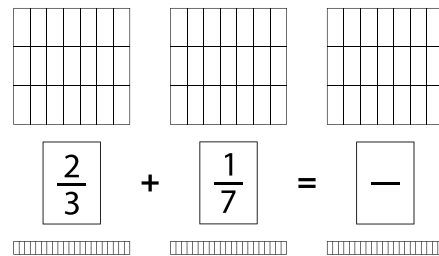
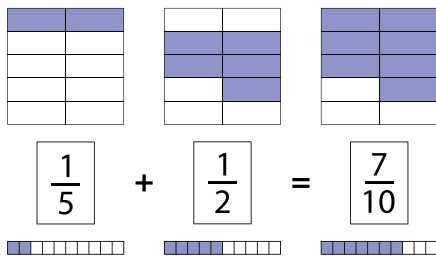
Surname:



Adding Fractions

Name:

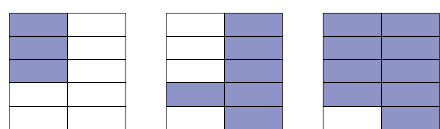
Surname:



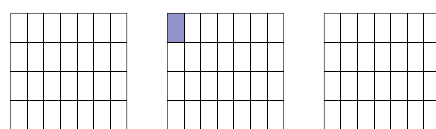
Adding Fractions

Name:

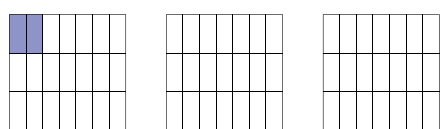
Surname:



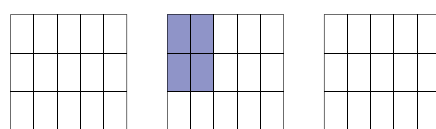
$$\frac{3}{10} + \frac{3}{5} = \frac{9}{10}$$



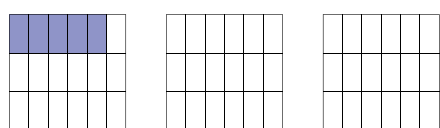
$$\frac{5}{7} + \frac{1}{28} = \text{—}$$



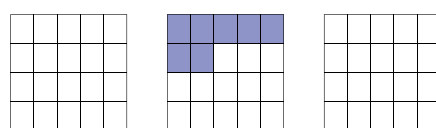
$$\frac{2}{21} + \frac{2}{3} = \text{—}$$



$$\frac{3}{5} + \frac{4}{15} = \text{—}$$



$$\frac{5}{18} + \frac{1}{6} = \text{—}$$



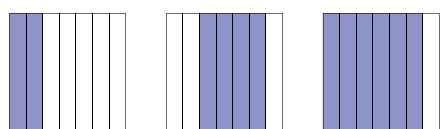
$$\frac{1}{2} + \frac{7}{20} = \text{—}$$



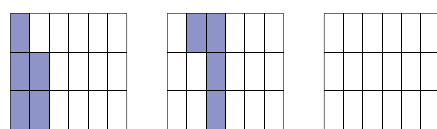
Adding Fractions

Name:

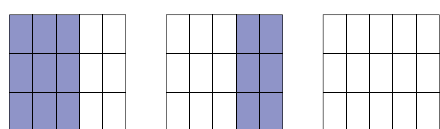
Surname:



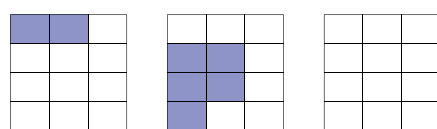
$$\frac{2}{7} + \frac{4}{7} = \frac{6}{7}$$



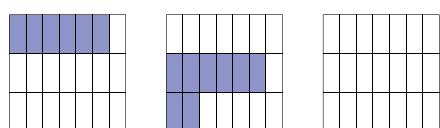
$$\frac{5}{18} + \frac{4}{18} = \frac{-}{-}$$



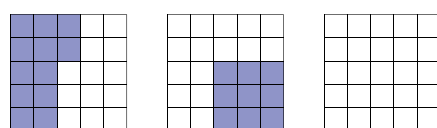
$$\frac{9}{15} + \frac{6}{15} = \frac{-}{-}$$



$$\frac{2}{12} + \frac{5}{12} = \frac{-}{-}$$



$$\frac{6}{21} + \frac{8}{21} = \frac{-}{-}$$



$$\frac{12}{25} + \frac{9}{25} = \frac{-}{-}$$

