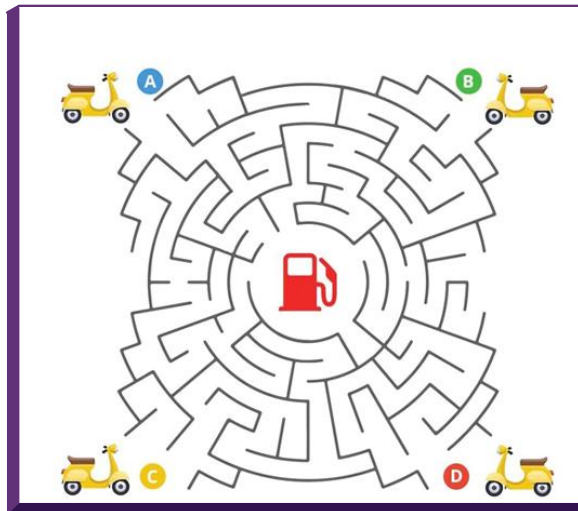


Visual Brain Teasers and Puzzles

1. Find the Path Puzzle



Bip bip! Can you tell which scooter will reach the gas station?



ANSWER

The answer is B!

If you follow the road path, you will see that only B can reach the gas station.

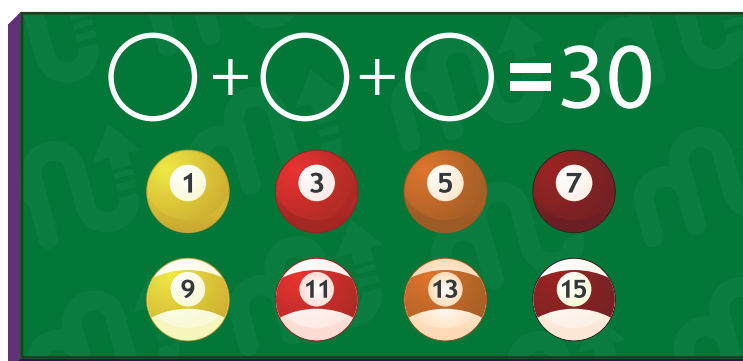
Want to solve more puzzle? Let's try [MentalUP Brain Teaser App for FREE NOW!](#)

2. Tricky Equation Puzzle



Which balls you should put in the hole in order to total 30?

This is a question that practical people can solve easily.



ANSWER

This question cannot be solved mathematically. This is because the sum of three add numbers cannot be an even number.

What you need to measure here is your attention!

If you place balls 11 and 13 into the holes, you get 24.

Then, if you put ball 9 upside down in the hole, you get $24 + 6 = 30$.

Join MentalUP in two simple steps for more progressive and brain teasers, and measure your results against your peers. MentalUP Brain Teasers: [Yes! I want to try them!](#)

3. Who Is Left-Handed ?

Can you guess who is left-handed and why?



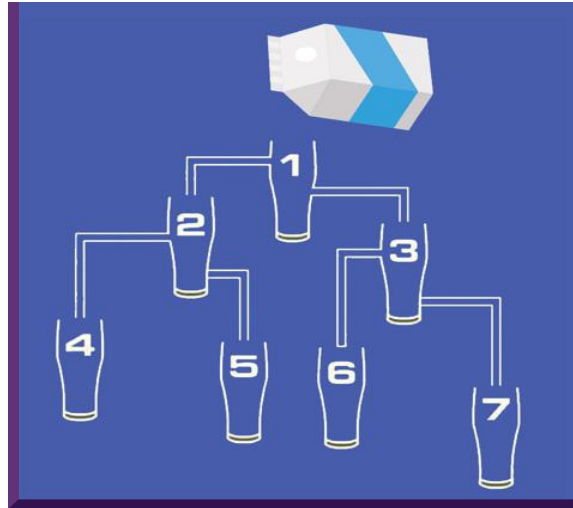
ANSWER

It's irregular to serve drinks with the left hand for a right-handed person. So, **the answer is 5.**

You're doing great! You can continue with MentalUP App to see your detailed performance reports: [Start Now!](#)

4. Which Glass Gets Full First? ?

You'll love this picture brain teaser! Just concentrate and think about which glass will be filled first!



ANSWER

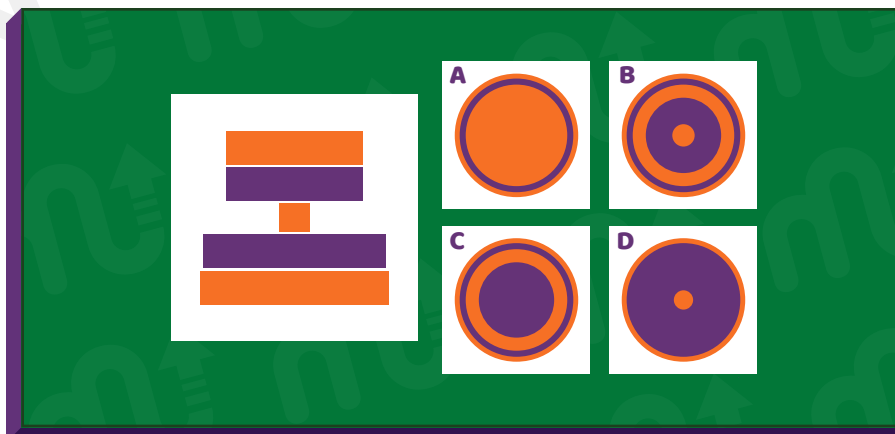
The answer is 3!

Glass 5, 6 and 7 not possible as there is a blocked connection. Now, as the connection to 3 is lower than that of 2, it will first while rest milk glasses will remain empty.

Access 100's visual brain test for FREE: [Try MentalUP - Brain Teasers App](#)

5. A Bird's Eye View Riddle ?

Which one is the air view of the tower on the left?



ANSWER

First of all, let's look at the picture on the left.

The top layer is orange. Here, we can eliminate option C directly. The purple layer underneath will not be visible because it is the same size as the top one. The small circle below will not be seen from the top of the mould.

Beneath the small orange circle is a large purple circle. This is the second circle that will appear after the initial orange circle and will appear as a thin purple line.

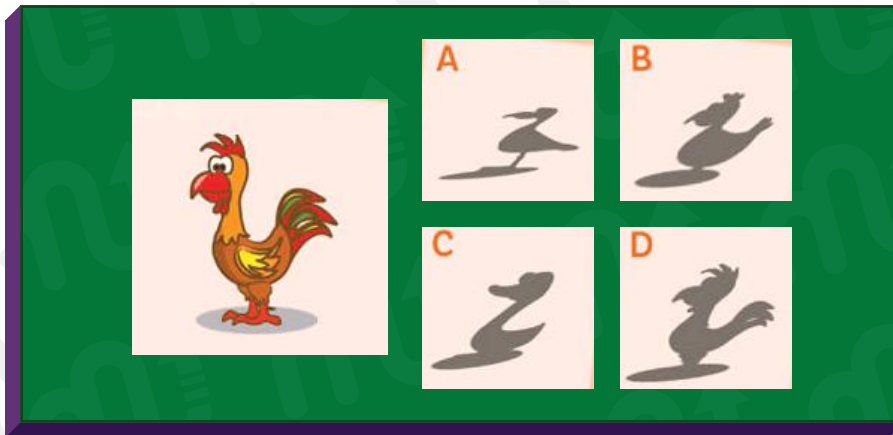
A slightly larger orange circle than the purple one is just below it. This will appear on the outside as the largest circle in our painting.

Therefore, **the answer is A.**

Well done! Do you like it? Many of them waiting for you in MentalUP with premium features:
[I want to try MentalUP](#)

6. Shadow Brain Teaser ?

Which shadow corresponds to the image on the left?



ANSWER

The correct answer is D.

For more visual brain teasers, download MentalUP and test your visual intelligence skills. You can see your detailed working reports and even compare your results with your peers!

[MentalUP Brain Teasers App: Click Here to Start!](#)

7. Count the Blocks Puzzle ?

Let's guess how many blocks in this tower?



ANSWER

The answer is 9!


You need to count other blocks too which cannot be seen in the image.

MentalUP has interactive brain teaser puzzles games for kids as well as for adults! [Try MentalUP Games Free](#)

8. Attention Brain Teaser ?

Which way is the bus going?

Here is a tip for you: This is a bus in the U.K.



ANSWER

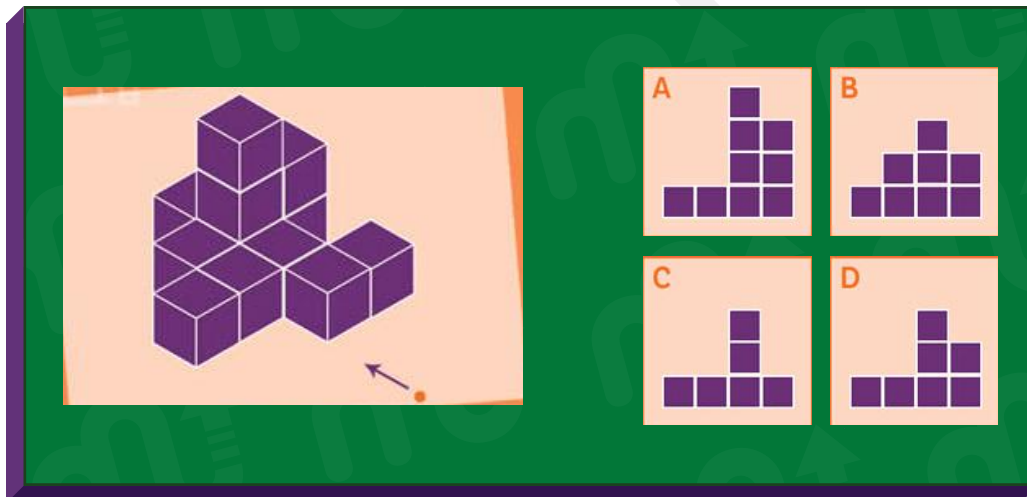
The bus is **moving left**.

Because we cannot see the door of the bus in this picture!

Couldn't find the answer? You can always do brain exercises and improve your visual attention easily with [MentalUP Brain Teasers App](#)!

9. Visual Brain Teaser ?

View the blocks on the left from the orange point and direction of the arrow.
Which image on the right is the correct view?



ANSWER

Let's answer the question step by step. We start at the orange spot and look at the blocks.

There are four blocks at the base.

There are two blocks on the right on the top floor. This eliminates option C.

If we go up one more floor, we see only the second block on the right.

So, **the answer is D**.

Try MentalUP for more Visual Brain Teaser: [MentalUP Brain Teaser App](#)

10. Visual Brain Question ?

How many squares are there on the chessboard?



ANSWER

- 8x8:1
- 7x7:4
- 6x6:9
- 5x5:16
- 4x4:25
- 3x3:36
- 2x2:49
- 1x1:64

There are **204 squares on a chessboard.**

Chess is a good exercise for your thinking skills! Don't you like playing chess? Then, we bet you'll like MentalUP Brain Games: [Click Here to Play Brain Games!](#)